

Monday 11/1/21 - Measure perimeter

Key Vocabulary:

Measure

Perimeter

Rectangle

Rectilinear

Ruler

Accurate

Parallel sides

Fluency Qs from Video:

Pause the Video and answer the questions when told to do so. The answers will be displayed after the video too so no peeking! 😊


- 1) 1 cm = _____ mm
- 2) 75 mm = _____ cm
- 3) How many sides does a quadrilateral have?
- 4) How many pairs of equal sides does a rectangle have?

Main Questions:

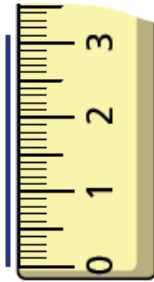
Some of the questions on the other worksheet will require you to print and use a ruler. If you can't do this, please don't worry! Just do the ones where you don't need to print – here they are. Just answer on some paper.

1 What is the length of each line?

a)



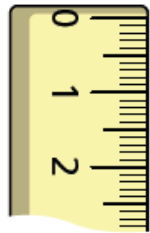
c)



b)



d)



2

How long is the pencil?





3 Dexter is measuring the length of a line.

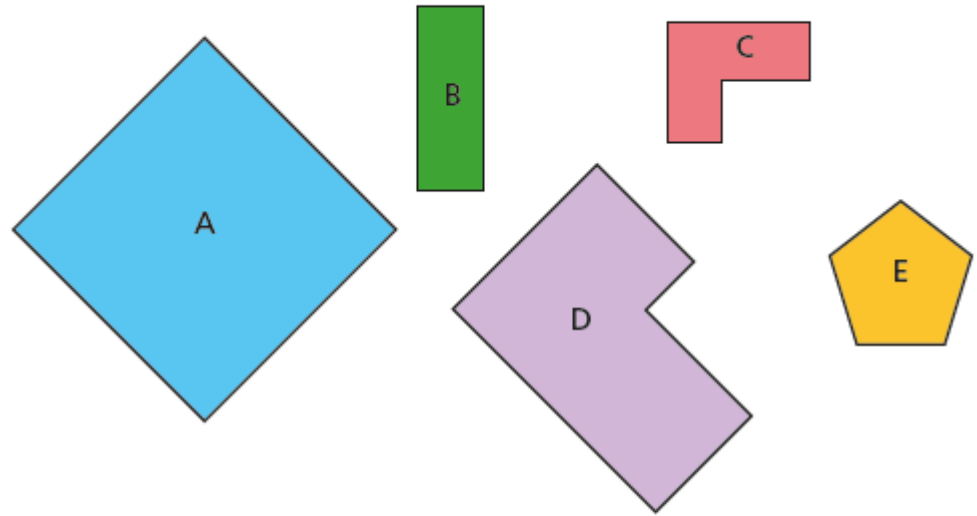


I think that the line is 2.6 cm long.



Do you agree with Dexter? _____
Explain why.

8 Sort the shapes into the correct categories.



	Regular	Irregular
Perimeter less than 10 cm		
Perimeter greater than 10 cm		